

Thakur Educational Trust's (Regd.)
THAKUR VIDYA MANDIR HIGH SCHOOL & JUNIOR COLLEGE
I Terminal Examination 2015-16
Subject : Mathematics

NAME _____ Std: I DIV. _____

Roll NO.: _____

DATE - 28 / 09 / 2015

MARKS: 60

QI A] Write numerals :

(5)

1. forty - _____

2. Thirty three - _____

3. Nineteen - _____

4. Twenty nine - _____

5. Eleven - _____

B] Write in words :

(5)

a) 16 - _____

b) 48 - _____

c) 50 - _____

d) 13 - _____

e) 37 - _____

QII A] Fill in the boxes :

(5)

a) $2 \times 2 =$

b) $1 \times 7 =$






c) $2 \times 5 =$

d) $1 \times 8 =$

e) $2 \times 6 =$

B] Match the following :

(5)

	A	B
a)	4	
b)	3	
c)	2	
d)	1	
e)	5	


QIII A] Do as directed :

1) Tick (√) the 'big' object and cross (x) the 'small' object : (2)






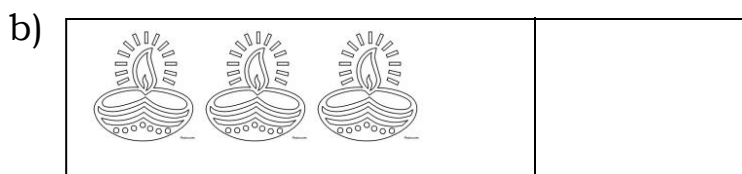
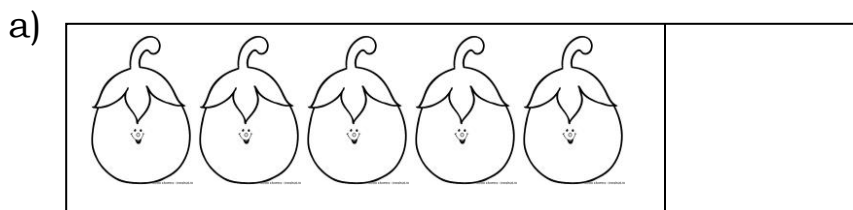
2) Tick (√) the one that is ' up ' and cross (x) the one that is 'down' : (2)





3) Tick (√) the boy ' near ' the house and cross (x) the boy 'far' from the house: (2)




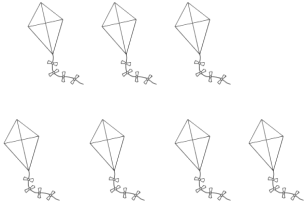

4) Draw one line for every object in the picture : (2)



5) Join the similar shapes: (2)




B] 1) Count the objects and circle the correct number : (3)

		
7 6 8	7 6 8	7 6 8


2) Write the numbers in reverse order : (3)

8								1
---	--	--	--	--	--	--	--	---

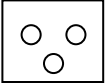
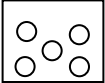
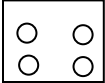
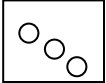
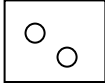
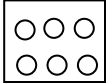
3) Draw more objects than the given ones: (1)



	
---	--

4) Draw less objects than the given ones: (1)

	
---	--


5) Join the number to the correct box : (2)

a)    b)   

QIV Do as directed :

A] 1) Colour any four cups : (2)



2) Write the correct number in each box : (2)

a) $1 + 2 =$ b) $7 + 1 =$

3) Write the missing numbers :

(2)

6			9
---	--	--	---

4) Write two numbers bigger than the given number :

(2)

7		
---	--	--

5) Write two numbers smaller than the given number :

(2)

		9
--	--	---

B] 1) Write the given numbers in serial order :

(5)

8, 5, 9, 6, 7

--	--	--	--	--

2) Add :

(2)

a) $5 + 2 =$

b) $2 + 5 =$

3) Write the correct number in each box :

(3)

Six cows on a farm

Three more joined them $+$

How many cows are there now?

All the best

Q. I. A] Fill in the blanks by choosing the correct words from the

bracket:-

(5)

(leaves, carrots, hurt, morning, bin)

- 1) It was Sunday _____.
- 2) We can pick up dry _____ and put them in the _____.
- 3) The doggie had _____ its paw.
- 4) Munnu's mother asked her to eat some red and orange _____.

B] Write the opposite for :

(6)

- 1) yes x _____
- 2) in x _____
- 3) buy x _____
- 4) good x _____
- 5) come x _____
- 6) up x _____

C] Write rhyming words for :

(4)

- 1) fun - _____
- 2) can - _____
- 3) tell - _____
- 4) will - _____

Q. II. A] Make sentences :

(4)

- 1) water - _____

- 2) shop - _____

- 3) hurt - _____

- 4) Sunday - _____

B] Who said to whom ?

(3)

- 1) " We can pick up dry leaves."

- 2) " Colourful meals are good meals ."

- 3) " Let me see ."

C] Circle the correct word :

(3)

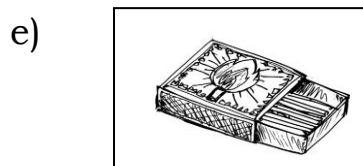
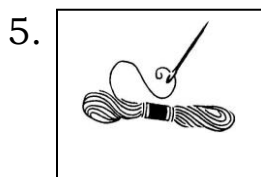

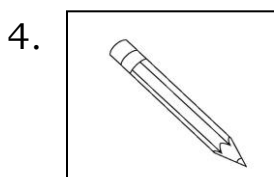
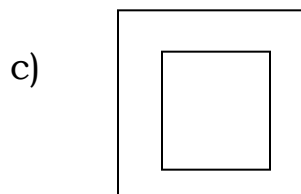
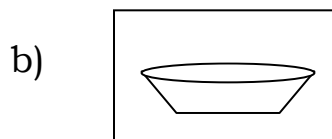


- 1) Munnu's meal become quite [colourful / colourless].
- 2) Raju put on [dirty / clean] clothes.
- 3) Munnu wanted to buy a colourful [balloon / ball].

Q. III A] Match the columns :

(5)

Column A

Column B



B] Answer the following questions :

(10)

Q1. How is the pink rose ?

Ans _____

Q2. What did Munnu like to eat ?

Ans _____

Q3. Where did Rohan and Sania take the doggie ?

Ans _____

Q4. Who like to work in the garden ?

Ans _____

Q5. What kind of friends did Raju like ?

Ans _____

Grammar

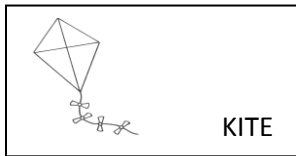
QI Do as directed:

1. Write the word in capital letters:

(1)



b) Write the word in small letters:



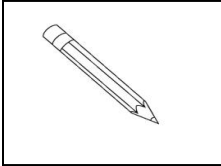
2. Fill in the blanks:

(1)

- a) Independence day falls in the month of _____ .
b) _____ is the day after Friday.

3. a) Write the missing vowels :


(1)



P _ _ n c _ _ l

b) Circle the consonant in the word :

(1)



S u n

c] Use 'a' or 'an' to complete the sentences :


(1)

- a. He is _____ Indian.
b. Kim reads _____ story everyday.


4. Write the correct name under each picture:

(2)

a.



b.



_____ [duck/ bee] _____ [crab / lion]

5. Look at the picture and choose the helper from the bracket:

(1)



_____ [cobbler / doctor]


6. Underline the naming word in the sentences:

(1)

- a. The dog bites.
b. I stay in Kandivali.

7. Circle the correct word given under the picture:

(1)




[tree / trees]

[ball / balls]

8. Re-arrange the letters to get the correct word :

(1)

a)




aannab = _____

b) Write the words in the proper group :


(2)




grapes



eyes



sparrow



ship

Vehicle	Bird	Fruit	Parts of the body
_____	_____	_____	_____

9. Fill in the blanks with He, She or It :

(1)

Look at the monkey. _____ is wearing a hat.

10. Choose the correct word from the bracket and fill in the correct gender :

(1)

- Cock and _____ [doe / hen]
- brother and _____ [sister / uncle]

QII] Write five sentences on the topic: 'Trees'

(5)

- _____
- _____
- _____
- _____
- _____

All the best

